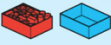
















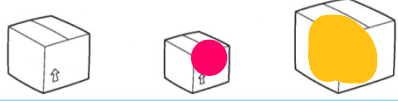





# Senior Infants Maths Answers Week May 11<sup>th</sup>

Page	Answer
115	<p><b>Full/empty</b> </p> <p>Colour the full containers red. Colour the empty containers blue.</p> <p>a </p> <p>b </p> <p>c </p> <p>d </p> <p>e </p> <p><small>STRAND: Measures STRAND-UNIT: EQUIPMENT Capacity LANGUAGE: Colour, full, empty, nothing, full up to the top/bottom</small>  115</p>
116	<p><b>Holds more/holds less</b> </p> <p>Colour the objects that hold more.</p> <p>a </p> <p>b </p> <p>c </p> <p>d </p> <p>e </p> <p><small>116 STRAND: Measures STRAND-UNIT: EQUIPMENT Capacity LANGUAGE: Colour, containers, holds more, holds less</small> </p>
117	<p><b>Holds most/holds least</b> </p> <p>Colour the containers that hold the most yellow. Colour the containers that hold the least pink.</p> <p>a </p> <p>b </p> <p>c </p> <p>d </p> <p>e </p> <p><small>STRAND: Measures STRAND-UNIT: EQUIPMENT Capacity LANGUAGE: Colour, yellow, pink, holds more/most, less/least, most of all, not as much, containers</small>  117</p>

118	For this page the answers will depend on what items you use, therefore everyone will have different answers.
-----	--